

Chapter 05.02

Direct Method of Interpolation – More Examples

Mechanical Engineering

Example 1

For the purpose of shrinking a trunnion into a hub, the reduction of diameter ΔD of a trunnion shaft by cooling it through a temperature change of ΔT is given by

$$\Delta D = D\alpha\Delta T$$

where

D = original diameter (in.)

α = coefficient of thermal expansion at average temperature (in/in/°F)

The trunnion is cooled from 80°F to -108°F, giving the average temperature as -14°F.

The table of the coefficient of thermal expansion vs. temperature data is given in Table 1.

Table 1 Thermal expansion coefficient as a function of temperature.

Temperature, T (°F)	Thermal Expansion Coefficient, α (in/in/°F)
80	6.47×10^{-6}
0	6.00×10^{-6}
-60	5.58×10^{-6}
-160	4.72×10^{-6}
-260	3.58×10^{-6}
-340	2.45×10^{-6}

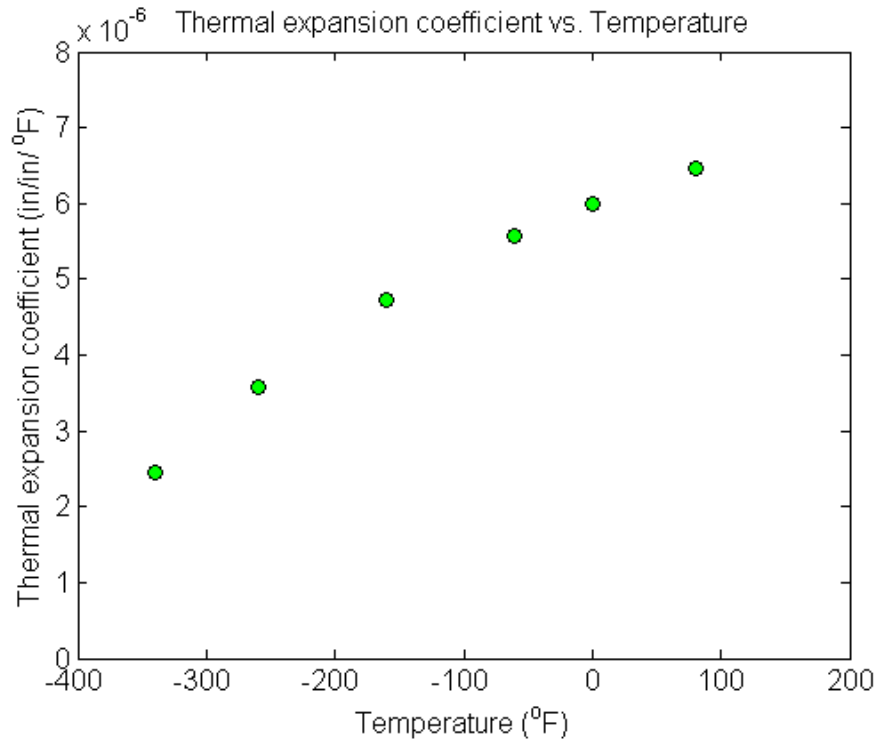


Figure 1 Thermal expansion coefficient vs. temperature.

If the coefficient of thermal expansion needs to be calculated at the average temperature of -14°F , determine the value of the coefficient of thermal expansion at $T = -14^{\circ}\text{F}$ using the direct method of interpolation and a first order polynomial.

Solution

For first order polynomial interpolation (also called linear interpolation), we choose the coefficient of thermal expansion given by

$$\alpha(T) = a_0 + a_1 T$$

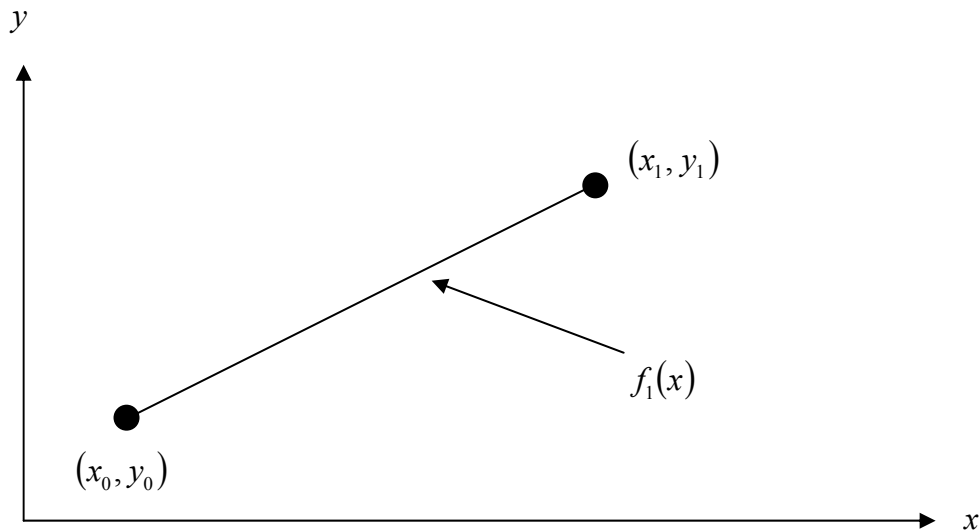


Figure 2 Linear interpolation.

Since we want to find the coefficient of thermal expansion at $T = -14^\circ\text{F}$, and we are using a first order polynomial, we need to choose the two data points that are closest to $T = -14^\circ\text{F}$ that also bracket $T = -14^\circ\text{F}$ to evaluate it. The two points are $T_0 = 0^\circ\text{F}$ and $T_1 = -60^\circ\text{F}$.

Then

$$T_0 = 0, \quad \alpha(T_0) = 6.00 \times 10^{-6}$$

$$T_1 = -60, \quad \alpha(T_1) = 5.58 \times 10^{-6}$$

gives

$$\alpha(0) = a_0 + a_1(0) = 6.00 \times 10^{-6}$$

$$\alpha(-60) = a_0 + a_1(-60) = 5.58 \times 10^{-6}$$

Writing the equations in matrix form, we have

$$\begin{bmatrix} 1 & 0 \\ 1 & -60 \end{bmatrix} \begin{bmatrix} a_0 \\ a_1 \end{bmatrix} = \begin{bmatrix} 6.00 \times 10^{-6} \\ 5.58 \times 10^{-6} \end{bmatrix}$$

Solving the above two equations gives

$$a_0 = 6.00 \times 10^{-6}$$

$$a_1 = 0.007 \times 10^{-6}$$

Hence

$$\begin{aligned} \alpha(T) &= a_0 + a_1 T \\ &= 6.00 \times 10^{-6} + 0.007 \times 10^{-6} T, \quad -60 \leq T \leq 0 \end{aligned}$$

At $T = -14^\circ\text{F}$,

$$\begin{aligned} \alpha(-14) &= 6.00 \times 10^{-6} + 0.007 \times 10^{-6}(-14) \\ &= 5.902 \times 10^{-6} \text{ in/in/}^\circ\text{F} \end{aligned}$$

Example 2

For the purpose of shrinking a trunnion into a hub, the reduction of diameter ΔD of a trunnion shaft by cooling it through a temperature change of ΔT is given by

$$\Delta D = D\alpha\Delta T$$

where

D = original diameter (in.)

α = coefficient of thermal expansion at average temperature (in/in/°F)

The trunnion is cooled from 80°F to -108°F, giving the average temperature as -14°F.

The table of the coefficient of thermal expansion vs. temperature data is given in Table 2.

Table 2 Thermal expansion coefficient as a function of temperature.

Temperature, T (°F)	Thermal Expansion Coefficient, α (in/in/°F)
80	6.47×10^{-6}
0	6.00×10^{-6}
-60	5.58×10^{-6}
-160	4.72×10^{-6}
-260	3.58×10^{-6}
-340	2.45×10^{-6}

If the coefficient of thermal expansion needs to be calculated at the average temperature of -14°F, determine the value of the coefficient of thermal expansion at $T = -14^\circ\text{F}$ using the direct method of interpolation and a first order polynomial.

Solution

For second order polynomial interpolation (also called quadratic interpolation), we choose the coefficient of thermal expansion given by

$$\alpha(T) = a_0 + a_1T + a_2T^2$$

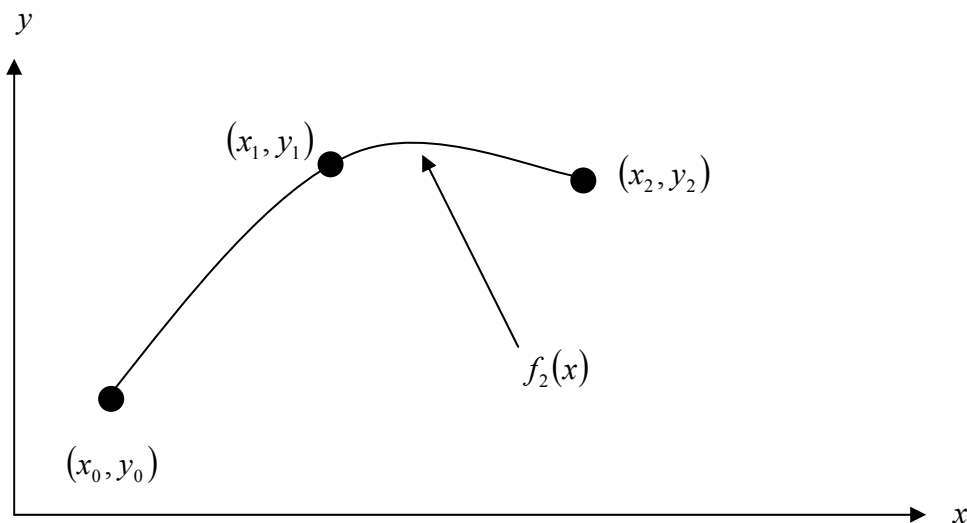


Figure 3 Quadratic interpolation.

Since we want to find the coefficient of thermal expansion at $T = -14^\circ\text{F}$, and we are using a second order polynomial, we need to choose the three data points that are closest to $T = -14^\circ\text{F}$ that also bracket $T = -14^\circ\text{F}$ to evaluate it. These three points are $T_0 = 80^\circ\text{F}$, $T_1 = 0^\circ\text{F}$ and $T_2 = -60^\circ\text{F}$.

Then

$$T_0 = 80, \quad \alpha(T_0) = 6.47 \times 10^{-6}$$

$$T_1 = 0, \quad \alpha(T_1) = 6.00 \times 10^{-6}$$

$$T_2 = -60, \quad \alpha(T_2) = 5.58 \times 10^{-6}$$

gives

$$\alpha(80) = a_0 + a_1(80) + a_2(80)^2 = 6.47 \times 10^{-6}$$

$$\alpha(0) = a_0 + a_1(0) + a_2(0)^2 = 6.00 \times 10^{-6}$$

$$\alpha(-60) = a_0 + a_1(-60) + a_2(-60)^2 = 5.58 \times 10^{-6}$$

Writing the three equations in matrix form, we have

$$\begin{bmatrix} 1 & 80 & 6400 \\ 1 & 0 & 0 \\ 1 & -60 & 3600 \end{bmatrix} \begin{bmatrix} a_0 \\ a_1 \\ a_2 \end{bmatrix} = \begin{bmatrix} 6.47 \times 10^{-6} \\ 6.00 \times 10^{-6} \\ 5.58 \times 10^{-6} \end{bmatrix}$$

Solving the above three equations gives

$$a_0 = 6.00 \times 10^{-6}$$

$$a_1 = 6.5179 \times 10^{-9}$$

$$a_2 = -8.0357 \times 10^{-12}$$

Hence

$$\alpha(T) = 6.00 \times 10^{-6} + 6.5179 \times 10^{-9}T - 8.0357 \times 10^{-12}T^2, \quad -60 \leq T \leq 80$$

At $T = -14^\circ\text{F}$,

$$\begin{aligned} \alpha(-14) &= 6.00 \times 10^{-6} + 6.5179 \times 10^{-9}(-14) - 8.0357 \times 10^{-12}(-14)^2 \\ &= 5.9072 \times 10^{-6} \text{ in/in/}^\circ\text{F} \end{aligned}$$

The absolute relative approximate error $|\epsilon_a|$ obtained between the results from the first and second order polynomial is

$$\begin{aligned} |\epsilon_a| &= \left| \frac{5.9072 \times 10^{-6} - 5.902 \times 10^{-6}}{5.9072 \times 10^{-6}} \right| \times 100 \\ &= 0.087605\% \end{aligned}$$

Example 3

For the purpose of shrinking a trunnion into a hub, the reduction of diameter ΔD of a trunnion shaft by cooling it through a temperature change of ΔT is given by

$$\Delta D = D\alpha\Delta T$$

where

D = original diameter (in.)

α = coefficient of thermal expansion at average temperature (in/in/°F)

The trunnion is cooled from 80°F to -108°F, giving the average temperature as -14°F.

The table of the coefficient of thermal expansion vs. temperature data is given in Table 3.

Table 3 Thermal expansion coefficient as a function of temperature.

Temperature, T (°F)	Thermal Expansion Coefficient, α (in/in/°F)
80	6.47×10^{-6}
0	6.00×10^{-6}
-60	5.58×10^{-6}
-160	4.72×10^{-6}
-260	3.58×10^{-6}
-340	2.45×10^{-6}

- a) If the coefficient of thermal expansion needs to be calculated at the average temperature of -14°F, determine the value of the coefficient of thermal expansion at $T = -14^\circ\text{F}$ using the direct method of interpolation and a first order polynomial. Find the absolute relative approximate error for the third order polynomial approximation.
- b) The actual reduction in diameter is given by

$$\Delta D = D \int_{T_r}^{T_f} \alpha dT$$

where T_r = room temperature (°F)

T_f = temperature of cooling medium (°F)

Since

$$T_r = 80^\circ\text{F}$$

$$T_f = -108^\circ\text{F}$$

$$\Delta D = D \int_{80}^{-108} \alpha dT$$

Find out the percentage difference in the reduction in the diameter by the above integral formula and the result using the thermal expansion coefficient from part (a).

Solution

- a) For third order polynomial interpolation (also called cubic interpolation), we choose the coefficient of thermal expansion given by

$$\alpha(T) = a_0 + a_1T + a_2T^2 + a_3T^3$$

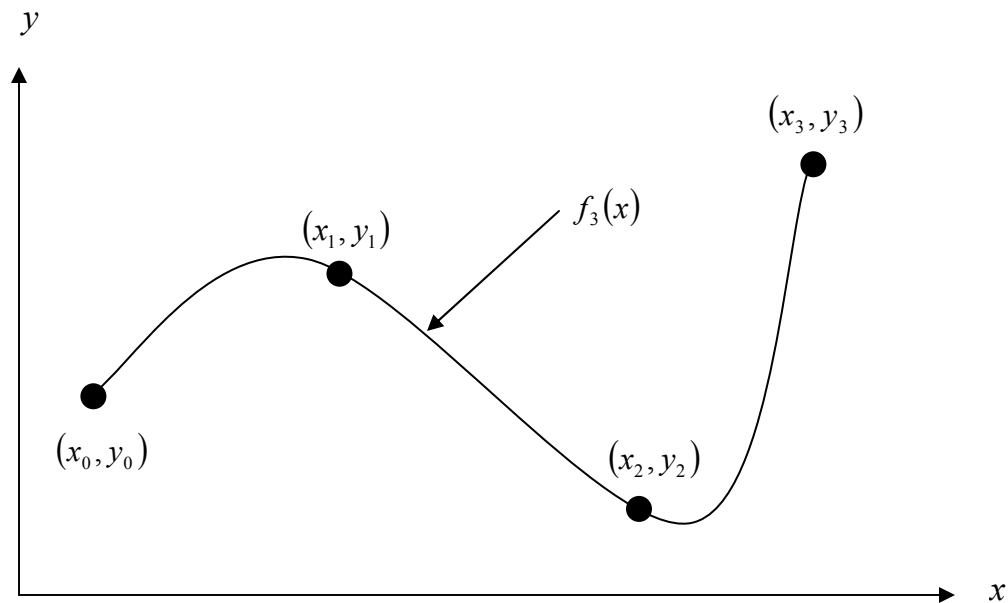


Figure 4 Cubic interpolation.

Since we want to find the coefficient of thermal expansion at $T = -14^\circ\text{F}$, and we are using a third order polynomial, we need to choose the four data points closest to $T = -14^\circ\text{F}$ that also bracket $T = -14^\circ\text{F}$ to evaluate it. Then the four points are $T_0 = 80^\circ\text{F}$, $T_1 = 0^\circ\text{F}$, $T_2 = -60^\circ\text{F}$ and $T_3 = -160^\circ\text{F}$.

$$T_0 = 80, \quad \alpha(T_0) = 6.47 \times 10^{-6}$$

$$T_1 = 0, \quad \alpha(T_1) = 6.00 \times 10^{-6}$$

$$T_2 = -60, \quad \alpha(T_2) = 5.58 \times 10^{-6}$$

$$T_3 = -160, \quad \alpha(T_3) = 4.72 \times 10^{-6}$$

gives

$$\alpha(80) = a_0 + a_1(80) + a_2(80)^2 + a_3(80)^3 = 6.47 \times 10^{-6}$$

$$\alpha(0) = a_0 + a_1(0) + a_2(0)^2 + a_3(0)^3 = 6.00 \times 10^{-6}$$

$$\alpha(-60) = a_0 + a_1(-60) + a_2(-60)^2 + a_3(-60)^3 = 5.58 \times 10^{-6}$$

$$\alpha(-160) = a_0 + a_1(-160) + a_2(-160)^2 + a_3(-160)^3 = 4.72 \times 10^{-6}$$

Writing the four equations in matrix form, we have

$$\begin{bmatrix} 1 & 80 & 6400 & 5.12 \times 10^5 \\ 1 & 0 & 0 & 0 \\ 1 & -60 & 3600 & -2.16 \times 10^5 \\ 1 & -160 & 25600 & -4.096 \times 10^6 \end{bmatrix} \begin{bmatrix} a_0 \\ a_1 \\ a_2 \\ a_3 \end{bmatrix} = \begin{bmatrix} 6.47 \times 10^{-6} \\ 6.00 \times 10^{-6} \\ 5.58 \times 10^{-6} \\ 4.72 \times 10^{-6} \end{bmatrix}$$

Solving the above four equations gives

$$a_0 = 6.00 \times 10^{-6}$$

$$\begin{aligned}a_1 &= 6.4786 \times 10^{-9} \\a_2 &= -8.1994 \times 10^{-12} \\a_3 &= 8.1845 \times 10^{-15}\end{aligned}$$

Hence

$$\begin{aligned}\alpha(T) &= a_0 + a_1T + a_2T^2 + a_3T^3 \\&= 6.00 \times 10^{-6} + 6.4786 \times 10^{-9}T - 8.1994 \times 10^{-12}T^2 + 8.1845 \times 10^{-15}T^3, \quad -160 \leq T \leq 80 \\ \alpha(-14) &= 6.00 \times 10^{-6} + 6.4786 \times 10^{-9}(-14) - 8.1994 \times 10^{-12}(-14)^2 + 8.1845 \times 10^{-15}(-14)^3 \\ &= 5.9077 \times 10^{-6} \text{ in/in/}^\circ\text{F}\end{aligned}$$

The absolute relative approximate error $|\epsilon_a|$ obtained between the results from the second and third order polynomial is

$$\begin{aligned}|\epsilon_a| &= \left| \frac{5.9077 \times 10^{-6} - 5.9072 \times 10^{-6}}{5.9077 \times 10^{-6}} \right| \times 100 \\ &= 0.0083867\%\end{aligned}$$

b) In finding the percentage difference in the reduction in diameter, we can rearrange the integral formula to

$$\frac{\Delta D}{D} = \int_{T_r}^{T_f} \alpha dT$$

and since we know from part (a) that

$$\alpha(T) = 6.00 \times 10^{-6} + 6.4786 \times 10^{-9}T - 8.1994 \times 10^{-12}T^2 + 8.1845 \times 10^{-15}T^3, \quad -160 \leq T \leq 80$$

we see that we can use the integral formula in the range from $T_f = -108^\circ\text{F}$ to $T_r = 80^\circ\text{F}$

Therefore,

$$\begin{aligned}\frac{\Delta D}{D} &= \int_{T_r}^{T_f} \alpha dT \\ &= \int_{80}^{-108} (6.00 \times 10^{-6} + 6.4786 \times 10^{-9}T - 8.1994 \times 10^{-12}T^2 + 8.1845 \times 10^{-15}T^3) dT \\ &= \left[6.00 \times 10^{-6}T + 6.4786 \times 10^{-9} \frac{T^2}{2} - 8.1994 \times 10^{-12} \frac{T^3}{3} + 8.1845 \times 10^{-15} \frac{T^4}{4} \right]_{80}^{-108} \\ &= -1105.9 \times 10^{-6}\end{aligned}$$

So $\frac{\Delta D}{D} = -1105.9 \times 10^{-6}$ in/in using the actual reduction in diameter integral formula. If we use the average value for the coefficient of thermal expansion from part (a), we get

$$\begin{aligned}\frac{\Delta D}{D} &= \alpha \Delta T \\ &= \alpha(T_f - T_r) \\ &= 5.9077 \times 10^{-6}(-108 - 80) \\ &= -1110.6 \times 10^{-6}\end{aligned}$$

and $\frac{\Delta D}{D} = -1110.6 \times 10^{-6}$ in/in using the average value of the coefficient of thermal expansion using a third order polynomial. Considering the integral to be the more accurate calculation, the percentage difference would be

$$|\epsilon_a| = \left| \frac{-1105.9 \times 10^{-6} - (-1110.6 \times 10^{-6})}{-1105.9 \times 10^{-6}} \right| \times 100$$
$$= 0.42775\%$$

INTERPOLATION

Topic	Direct Method of Interpolation
Summary	Examples of direct method of interpolation.
Major	Mechanical Engineering
Authors	Autar Kaw
Date	November 23, 2009
Web Site	http://numericalmethods.eng.usf.edu
